

Worksheet 1

Plant Reproduction And Agriculture.

Date : 04.09.22

I. Fill in the blanks :

1. Rice is cultivated during _____ season.
2. Seeds which have only one cotyledon are known as _____.
3. Dicot have _____ cotyledons.
4. When the seeds are soaked in the water they _____ in their size.
5. The process of spreading seed to different places is called _____.
6. In the seed the food is stored in the _____
7. Cotton is a _____ crop.

II. Name the following :

1. Two plants that reproduce from spore :

2. Seasons of India.









3. Two plants that reproduce by stem cuttings

4. Two plants that reproduce by roots

5. Two plants that reproduce by leaves

III. Name the following examples and how do they reproduce.

Q.1- Name the following examples and how do they reproduce?

 <p>1</p>	 <p>2</p>
 <p>3</p>	 <p>4</p>
 <p>5</p>	 <p>6</p>
 <p>7</p>	 <p>8</p>

Worksheet 2

Plant Reproduction And Agriculture. Date : 04.09.22

I. Choose the answers from the options given below.

(Embryo, summer, onion, irrigation, agriculture)

1. The practice of growing crops on a large scale for food or other purpose is termed as _____.
2. The watermelons grow well in _____ season.
3. Watering the crops in the field is called _____.
4. The baby plant is also known as _____.
5. _____ is a bulb shaped underground stem.

II. Name the following.

1. Two example of monocotyledonous seeds

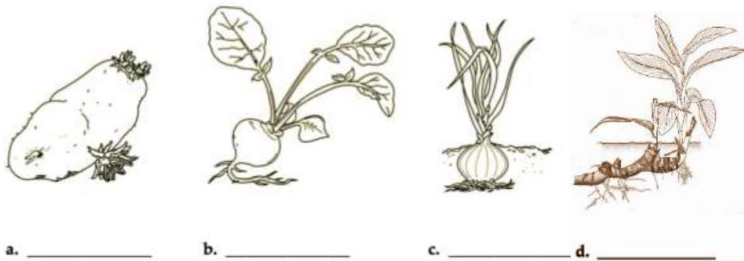
2. Two examples of dicotyledonous seeds

3. Two plants that grow during Rabi season.

4. Two plants that disperse their seeds by explosion

5. Two plants that disperse their seeds by water.

III. Identify the picture and mention it's part of reproduction



e. _____